















Buoyage Quiz

<p>1 a) Type of Buoy? b) IALA Region? c) What does it tell us?</p>	
<p>2 a) Type of Buoy shown in this Chart Symbol? b) Colour of the buoy? c) What does it tell us?</p>	
<p>3 a) Type of Buoy? b) What does it tell us?</p>	
<p>4 a) Type of Buoy? b) IALA Region? c) What does it tell us?</p>	
<p>5 a) Type of Buoy? b) What does it tell us?</p>	
<p>6 a) Type of Buoy shown in this Chart Symbol? b) Colour of the buoy? c) What does it tell us?</p>	
<p>7 a) Type of Buoy? b) IALA Region? c) What does it tell us?</p>	

<p>8 a) Type of Buoy? b) What does it tell us?</p>	
<p>9 a) Type of Buoy? b) IALA Region? c) What does it tell us?</p>	
<p>10 a) Type of Buoy? b) What does it tell us?</p>	
<p>11 a) Type of Buoy shown in this Chart Symbol? b) IALA Region? c) Colour of the Buoy? d) What does it tell us?</p>	
<p>12 a) Type of Buoy? b) What does it tell us?</p>	
<p>13 a) Type of Buoy? b) IALA Region? c) What does it tell us?</p>	
<p>14 a) Type of Buoy? b) What does it tell us?</p>	
<p>15 What does IALA stand for?</p>	