















# Buoyage Quiz Answers

<p>1 a) Type of Buoy? <b>Port Lateral Mark</b>            b) IALA Region? <b>A</b>            c) What does it tell us? <b>Marks the left side of a channel went entering a harbour / estuary etc</b></p>	
<p>2 a) Type of Buoy shown in this Chart Symbol? <b>South Cardinal Mark</b>            b) Colour of the buoy? <b>Yellow Black</b>            c) What does it tell us? <b>Safe Water to the South</b></p>	
<p>3 a) Type of Buoy? <b>North Cardinal Mark</b>            b) What does it tell us? <b>Safe Water to the North</b></p>	
<p>4 a) Type of Buoy? <b>Port Lateral Mark</b>            b) IALA Region? <b>B</b>            c) What does it tell us? <b>Marks the left side of a channel went entering a harbour / estuary etc</b></p>	
<p>5 a) Type of Buoy? <b>Safe Water Mark</b>            b) What does it tell us? <b>An area of Safe Water</b></p>	
<p>6 a) Type of Buoy shown in this Chart Symbol? <b>Isolated Danger Mark</b>            b) Colour of the buoy? <b>Red and Black Horizontal Stripes</b>            c) What does it tell us? <b>Marks an area of Isolated Danger</b></p>	
<p>7 a) Type of Buoy? <b>Preferred Channel Mark</b>            b) IALA Region? <b>B</b>            c) What does it tell us? <b>Preferred Channel to Port</b></p>	

<p>8 a) Type of Buoy? <b>West Cardinal Mark</b> b) What does it tell us? <b>Safe water to the West</b></p>	
<p>9 a) Type of Buoy? <b>Preferred Channel Mark</b> b) IALA Region? <b>A</b> c) What does it tell us? <b>Preferred Channel to Port</b></p>	
<p>10 a) Type of Buoy? <b>Special Mark</b> b) What does it tell us? <b>A site of special interest i.e. waterski zone, swim zone, oyster beds etc</b></p>	
<p>11 a) Type of Buoy shown in this Chart Symbol? <b>Starboard Lateral Mark</b> b) IALA Region? <b>A</b> c) Colour of the Buoy? <b>Green</b> d) What does it tell us? <b>Marks the right side of a channel went entering a harbour / estuary etc</b></p>	
<p>12 a) Type of Buoy? <b>Emergency Wreck Mark</b> b) What does it tell us?</p>	
<p>13 a) Type of Buoy? <b>Preferred Channel Mark</b> b) IALA Region? <b>A</b> c) What does it tell us? <b>Preferred Channel to Starboard</b></p>	
<p>14 a) Type of Buoy? <b>East Cardinal Mark</b> b) What does it tell us? <b>Safe Water to the East</b></p>	
<p>15 What does IALA stand for? <b>International Association of Lighthouse Authorities</b></p>	